

INCOLLA LE SEGUENTI SCHEDE SUL QUADERNO PRECEDUTE DALLA DATA.
LEGGI (ALMENO 3 VOLTE) PAGG. 41-42 LAGO BLU LETTURE

NA - NE - NI - NO - NU

RIQUADRA LE SILLABE.

POI LEGGI

NA

NE

NI

NO

NU

LA NANA LAVORA LA LANA.



IL NANO MARTINO RACCOGLIE LE NOCI.



IL NANO CAMMINA SULLA NEVE.



IL NANO TOCCA LE NUVOLE CON LE MANI.



RICOPIA.

NA

NE

NI

NO

NU

RA - RE - RI - RO - RU

CERCHIA

RA

RE

RI

RO

RU

POI LEGGI


LA RANA E IL ROSPO
SONO INNAMORATI.




IL ROSPO RUBA UNA
ROSA PROFUMATA.



LA RANA REGALA AL RO-
SPO UNA ROSA ROSSA.



POI SI SIEDONO SU UN
MURETTO E GUARDANO
LA NOTTE SCURA.



RICOPIA.

RA

RE

RI

RO

RU

IA - TE - TI - TO - TU

CERCHIA

TA

TE


TI

TO


TU

POI LEGGI


TATO IL TOPO
È SOTTO IL TAVOLO.




È TEMPO DI MANGIARE.
IL TOPO TORNA NELLA
TANA.



MAMMA TOPINA GLI PRE-
PARA UNO SPUNTINO.



TATO IL TOPO MANGIA
TUTTO CON GUSTO.



RICOPIA.

TA

TE

TI

TO

TU

LA LETTERA B

B

B

B

B

B

B

B

B

B

B B B

TROVA LA LETTERA **B** E CERCHIALA.
E LEGGI

LA BAMBOLA DI MARTINA

È MOLTO BIRICHINA.

OGNI MATTINA

ROVESCIA LA FARINA.

QUANDO ARRIVA LA SERA

NASCONDE LA BANANA E LA PERA.



COMPLETA LE SILLABE.


B A → BA

B E →

B I →

B O →

B U →



LA LETTERA V

INDOVINA!
 SEGNA CON UNA LA RISPOSTA ESATTA.

VOLA LA VESPA


VOLA IL CORVO.

VOLA LA VIPERA? SÌ NO

NON VOLA LA VOLPE





NON VOLA IL CAVALLO.

VOLA LA CAVALLETTA? SÌ NO

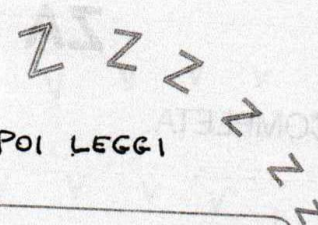


RISCRIVI TUTTE LE PAROLE CHE CONTENGONO LA LETTERA V.

COMPLETA.

V	A	→	VA	→		
	E	→	→		
	I	→	→		
	O	→	→		AEIOU
	U	→	→		

LA LETTERA Z



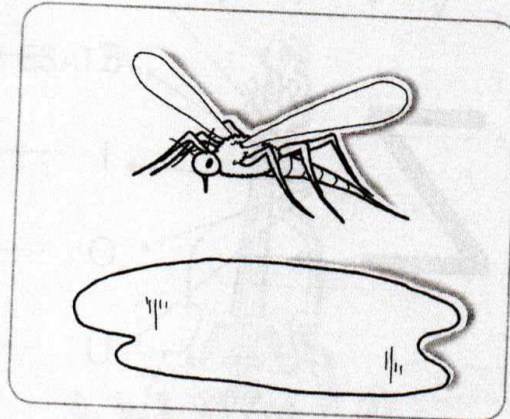
RIQUADRA LA LETTERA Z E RICOPIA LE FRASI .POI LEGGI

UNA ZANZARA RONZA
VICINO A UNA POZZAN-
GHERA.

UNA

.....

.....

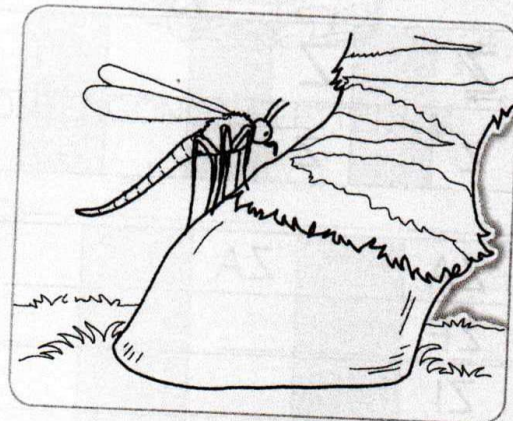


ZITTA ZITTA SI POSA
SULLO ZOCCOLO DI
UNA ZEBRA.

ZITTA

.....

.....




IL SUO RONZIO FA SCAP-
PARE LA GAZZELLA CHE
STA LÌ VICINO.

.....

.....

.....



LA LETTERA MANCANTE

METTI LE LETTERE CHE MANCANO E RISCRIVI SOTTO LE PAROLE.



.....ANO



.....UNA



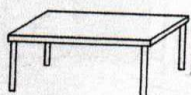
.....EVE



.....ANE



.....ANA




.....AVOLO



.....OCCA



.....OCA



.....ITO



.....OLE



.....AINO




.....ELA



CA.....E




TO.....O




MO.....O



U.....A




ME.....A



PI.....A




RA.....O



DA.....O



NA.....O



TU.....O



PIZ.....A




FAR.....ALIA

L'INDIZIO PREZIOSO


1 INDIVIDUA CHI È STATO E COLORALO.

**CHI TIENE NELLA MANO IL MAGGIOR NUMERO DI CUCCHIAINI...
HA MANGIATO TUTTO IL BARATTOLO DI MARMELLATA!**



2 INDICA CON UNA **x** DI CHI SI TRATTA.

**CHI HA IL MINOR NUMERO DI PENNARELLI...
HA DIMENTICATO L'ASTUCCIO A CASA!**



COMPITI DI MATEMATICA

Generated by Foxit PDF Creator © Foxit Software
<http://www.foxitsoftware.com> For evaluation only

ATTIVITÀ 42



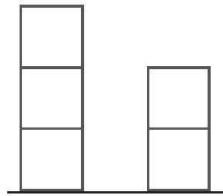
LE COLONNINE

1 COLORA OGNI COLONNINA, POI CONTA, SCRIVI I NUMERI
E CONFRONTA USANDO I SEGNI...

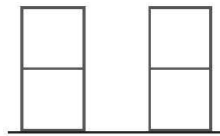
> MAGGIORE

< MINORE

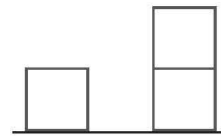
= UGUALE



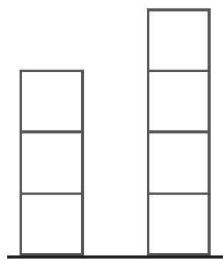
..... ○



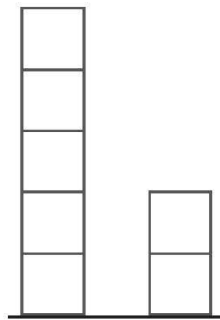
..... ○



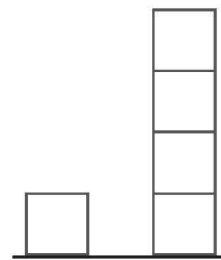
..... ○



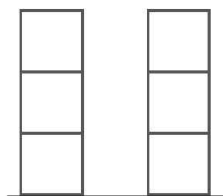
..... ○



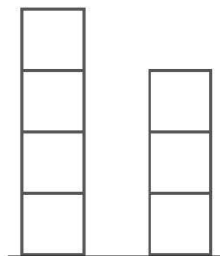
..... ○



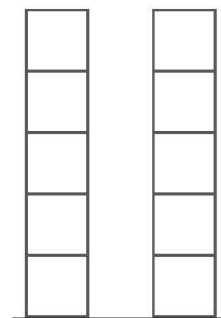
..... ○



..... ○



..... ○




..... ○

ATTIVITÀ 43

Generated by Foxit PDF Creator © Foxit Software
<http://www.foxitsoftware.com> For evaluation only.

SULL'ABACO

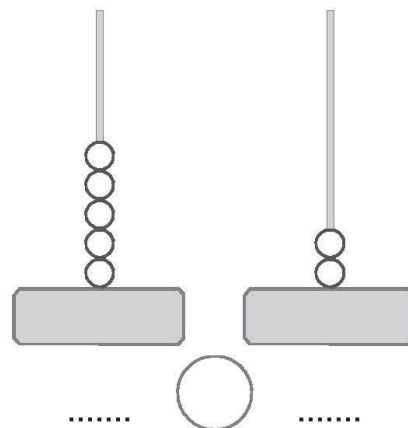
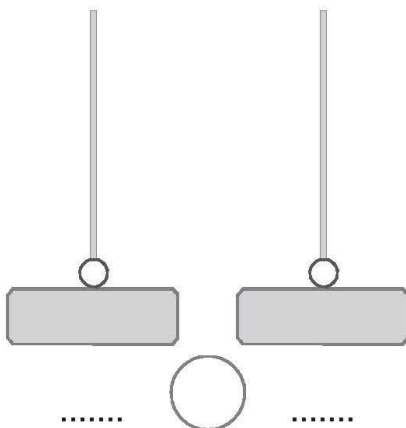
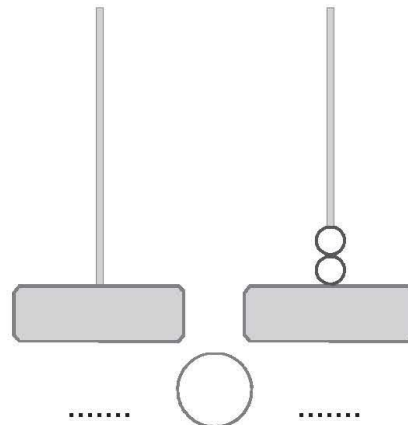
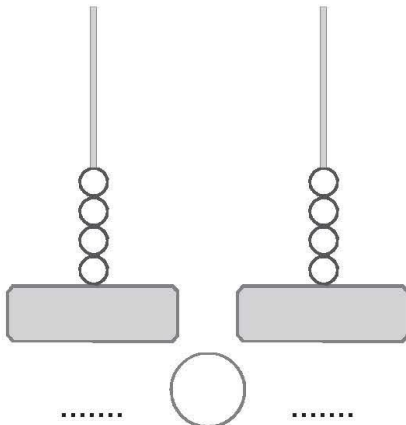
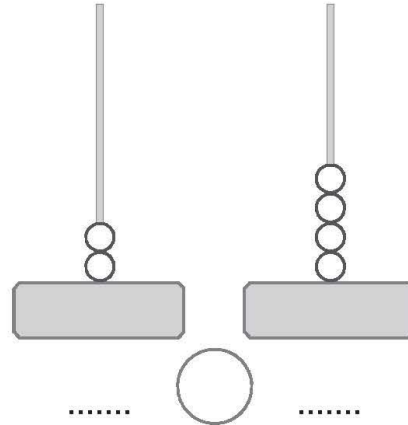
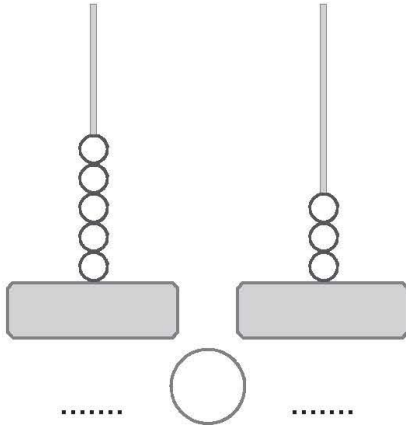


1 CONTA, SCRIVI I NUMERI E CONFRONTA USANDO I SEGNI...

> MAGGIORE

< MINORE

= UGUALE





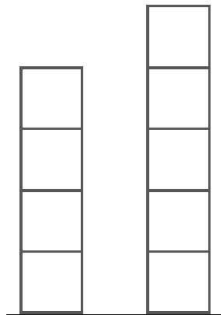
CONTO E CONFRONTO

1 CONTA, SCRIVI I NUMERI E CONFRONTA USANDO I SEGNI...

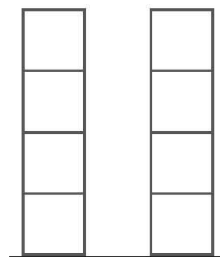
> MAGGIORE

< MINORE

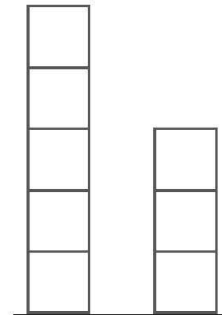
= UGUALE



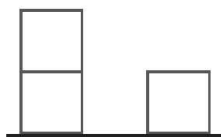
..... ○



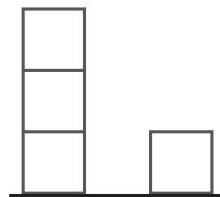
..... ○



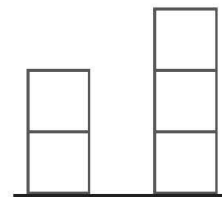
..... ○



..... ○

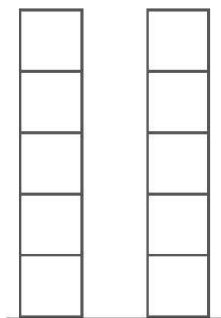


..... ○

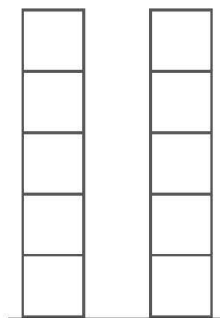


..... ○

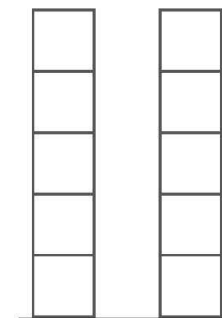
2 LEGGI I NUMERI, **COLORA LA GIUSTA QUANTITÀ** E CONFRONTA USANDO I SEGNI **>**, **<**, **=**.



4 ○ 2



1 ○ 1




3 ○ 5


COMPITI DI MATEMATICA

Generated by Foxit PDF Creator © Foxit Software
<http://www.foxitsoftware.com> For evaluation

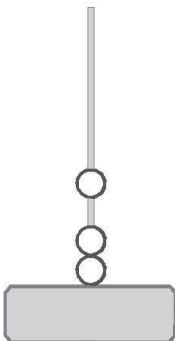
ATTIVITÀ 48




CON L'ABACO




1 RAPPRESENTA LE ADDIZIONI SULL'ABACO, **CONTA** E SCRIVI IL RISULTATO.




$2 + 1 = \dots$




$1 + 1 = \dots$




$3 + 2 = \dots$




$1 + 3 = \dots$




$2 + 3 = \dots$




$1 + 4 = \dots$



$2 + 0 = \dots$



$4 + 0 = \dots$



$0 + 3 = \dots$

ATTIVITÀ 49


Generated by Foxit PDF Creator © Foxit Software
<http://www.foxitsoftware.com> For evaluation only.

QUANTI IN TUTTO?



1 OSSERVA LE ILLUSTRAZIONI, LEGGI, CONTA E COMPLETA.

QUANTI BICCHIERI IN TUTTO?



I BICCHIERI CON LA CANNUCCIA SONO

I BICCHIERI SENZA LA CANNUCCIA SONO

$\square + \square = \square$

I BICCHIERI IN TUTTO SONO

QUANTI GELATI IN TUTTO?



I GELATI NEL CONO SONO

I GELATI NELLA COPPA SONO


$\square + \square = \square$

I GELATI IN TUTTO SONO

ATTIVITÀ 57

Generated by Foxit PDF Creator © Foxit Software
<http://www.foxitsoftware.com> For evaluation only.

QUANTI FIORI?



1 CONTA I FIORI, POI **DISEGNA** QUELLI CHE **MANCANO** PER ARRIVARE A SETTE, INFINE COMPLETA.




$$6 + \dots = 7$$



$$4 + \dots = 7$$



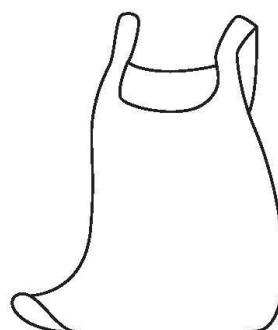
$$3 + \dots = 7$$



$$5 + \dots = 7$$



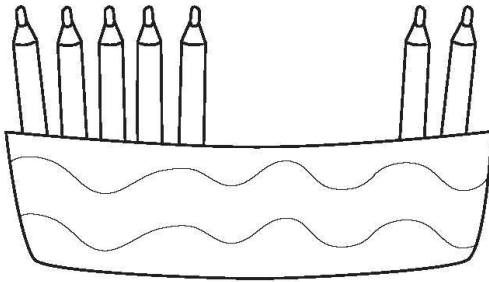
$$7 + \dots = 7$$



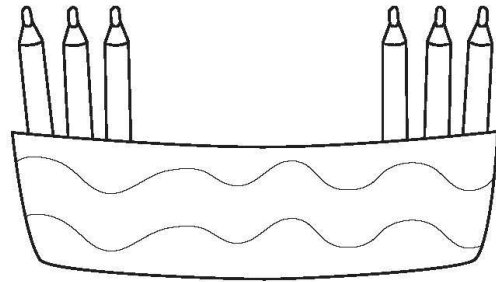
$$0 + \dots = 7$$

NEI PORTAMATITE

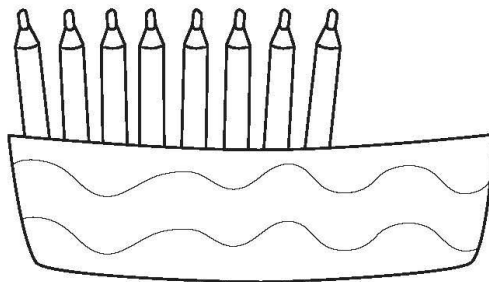
1 QUANTE MATITE DEVI **AGGIUNGERE** PER ARRIVARE A NOVE?
 DISEGNA, COMPLETA CON I NUMERI ED ESEGUI L'ADDIZIONE.



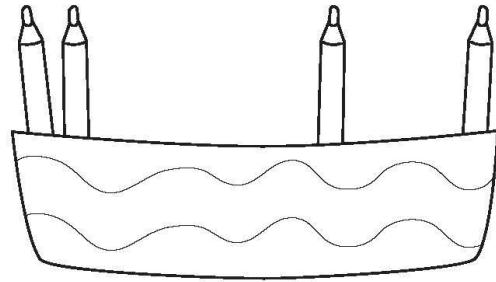
$$7 + \dots = 9$$



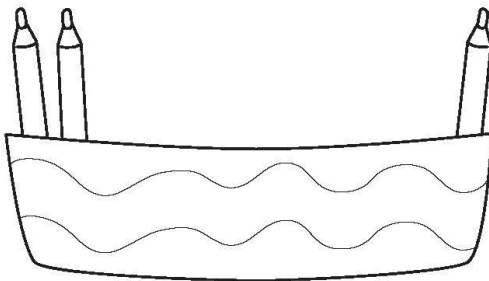
$$\dots + \dots = 9$$



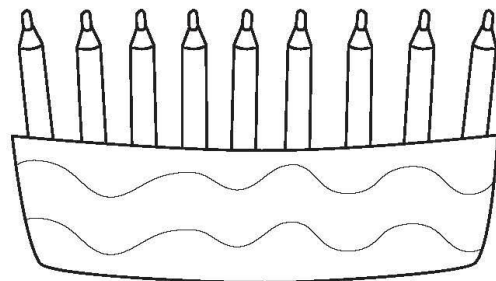
$$\dots + \dots = 9$$



$$\dots + \dots = 9$$



$$\dots + \dots = 9$$



$$\dots + \dots = 9$$